

FOR OFFICIAL USE

--	--	--	--	--	--

G

	KU	HI
Total Marks		

1660/402

NATIONAL
QUALIFICATIONS
2009

FRIDAY 29, MAY
10.20 AM – 11.20 AM

HOME ECONOMICS
STANDARD GRADE
General Level

Fill in these boxes and read what is printed below.

Full name of centre

Town

Forename(s)

Surname

Date of birth

Day Month Year

--	--	--	--	--	--	--	--	--	--

Scottish candidate number

--	--	--	--	--	--	--	--	--	--	--	--	--	--	--

Number of seat

- 1 Try to answer every question in this paper.
- 2 Read the questions carefully before you answer them.
- 3 Write your answers in the spaces provided.
- 4 If you need to do any rough work, use the spaces provided.
- 5 Before leaving the examination room you must give this book to the invigilator. If you do not, you may lose all the marks for this paper.






1. (a) Kate is going to help the drama group make costumes in the school hall.

Children from the group will help her.

They need new scissors to cut out fabric and paper.

The drama group have a budget of £15.00.

Study the information about scissors below.

Information about scissors			
	A	B	C
			
Handle type	Plastic	Soft-grip	Metal
Price	£3.00	£12.99	£16.99
Weight	• Lightweight	• Lightweight	• Heavyweight
Special features	<ul style="list-style-type: none"> • Sharp pointed • Short blade 	<ul style="list-style-type: none"> • Set of three in wooden storage block • Short, medium and long blades 	<ul style="list-style-type: none"> • Long blades • Serrated blade

1. (a) (continued)

Marks

KU	HI
1	
2	
2	

- (i) Choose the **most suitable** scissors for the drama group.

Scissors _____

1

- (ii) Give **two** reasons for your choice and explain why **each** reason is important to the drama group.

Reason 1 _____

2

Reason 2 _____

2




[Turn over

2. (a) 2 year old Mary is going to attend nursery.

Nursery activities will include painting, baking and playing outside in the sandpit.

Mary still wears a nappy.

Study the information about outfits below.

Information about outfits	
A: Sleep suit	
	<ul style="list-style-type: none"> • Zip up front • Care – machine wash – tumble dry • Warmth *** • Sizes available: 6-9 months 9-12 months • Soft touch velour • Padded soles
B: Ankle length pleated dress	
	<ul style="list-style-type: none"> • Zip at the back • Care – hand wash – drip dry • Warmth * • Sizes available: 1-2 years 2-3 years • Silk ribbon at waistband • Matching hat
C: Dungaree and top set	
	<ul style="list-style-type: none"> • Leg and shoulder poppers on dungarees • Care – machine wash – tumble dry • Warmth ** • Sizes available: 1-2 years 2-3 years • Reversible dungarees • Appliqué pocket

Key: * —————> *** Poor Good
--

2. (a) (continued)

Marks

KU	HI

(i) Choose the **most suitable** outfit for Mary.

Outfit _____

1

(ii) Give **three** reasons for your choice and explain why **each** reason is important for Mary's outfit.

Reason 1 _____

2

Reason 2 _____

2

Reason 3 _____

2

(iii) Mary is going to a wedding in July with her family.

Which outfit would be **most suitable** for this occasion?

Outfit _____

1




[Turn over

3. (a) Mr and Mrs Munro have two sons, in their late teens, who still live at home. Granny has moved in with them.

They like to eat their evening meal together, but dad sometimes gets home late.

They are going to buy a new steamer for cooking food while their new kitchen is being fitted.

Look at the information about steamers below.

Information about steamers			
	A	B	C
			
Food capacity	Large	Medium	Large
Automatic keep warm	Yes	No	No
Price	£13.50	£14.99	£69.99
Additional features	<ul style="list-style-type: none"> • 3 bowl electric steamer • Baskets pack inside each other when not in use • Boil dry safety cut out 	<ul style="list-style-type: none"> • Lidded steamer • Fits on top of most saucepans • Stainless steel 	<ul style="list-style-type: none"> • Electric steamer • 2 large baskets • Water level gauge

3. (a) (continued)

Marks	KU	HI
1		
2		
2		
2		
1		

(i) Choose the **most suitable** steamer for the Munro family.

Steamer _____

(ii) Give **three** reasons for your choice and explain why **each** reason is important to the Munro family.

Reason 1 _____

Reason 2 _____

Reason 3 _____

(iii) Gary has just moved into a flat. He has been given a £15.00 gift voucher and wants to buy a steamer to match his stainless steel cookware.

Which steamer would be **most suitable** for Gary?

Steamer _____

[Turn over

3. (continued)

Marks

KU	HI

(c) Fresh milk is a 'high risk' food.

Explain why fresh milk must be kept in a refrigerator.

1

(d) What is the correct temperature setting for a refrigerator?

Tick (✓) the correct answer below.

Between -5 °C and 0 °C

Between 1 °C and 4 °C

Between 6 °C and 10 °C

1

[Turn over

5. (a) 24 year old Peter is self-employed and sometimes works away from home.
 His wife, Zoe, works shifts.
 They both use the Internet.
 They want to open a joint bank account to save money for the deposit on a new flat.
 Look at the information on bank accounts below.

Information on bank accounts			
	A	B	C
24 hour Internet banking	No	Yes	Yes
Interest free overdraft limit	No	£100	£500
Special offers when account is opened	Free MP3 player	None	£200 start up bonus *
Local branches	Yes	No	Yes
Interest rate	3%	1.51%	6.5%

* Account holders must be over 18

5. (a) (continued)

Marks

KU	HI

- (i) Choose the **most suitable** bank account for Peter and Zoe.

Bank account _____

1

- (ii) Give **three** reasons for your choice and explain why **each** reason is important to Peter and Zoe.

Reason 1 _____

2

Reason 2 _____

2

Reason 3 _____

2

- (iii) 14 year old Sally has a paper round and wants to pay her wages into a local bank to save for her holidays.

Which bank account would be **most suitable** for Sally?

Bank account _____

1

[Turn over for Question 5 (b), (c) and (d) on Page eighteen

[BLANK PAGE]

FOR OFFICIAL USE ONLY

	KU		HI	
1		6		5
2		8		8
3		8		8
4		6		6
5		7		8
Total Marks		35		35