

X206/11/01

NATIONAL
QUALIFICATIONS 2014

FRIDAY, 23 MAY
9.00 AM – 10.30 AM

COMPUTING
INTERMEDIATE 2

Attempt Section I and Section II and **one** Part of Section III.

Section I – Attempt all questions.

Section II – Attempt all questions.

Section III – This section has three parts:

Part A – Artificial Intelligence

Part B – Computer Networking

Part C – Multimedia Technology

Choose **one** part and answer **all** of the questions in that part.

Read each question carefully.

Write your answers in the answer book provided. **Do not** write on the question paper.

Write as neatly as possible.

Answer in sentences wherever possible.



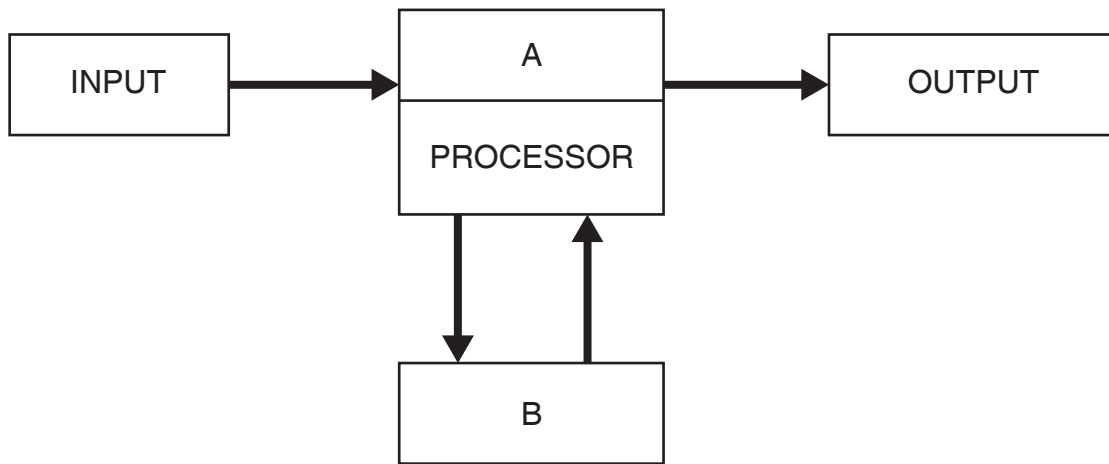
SECTION I

Attempt ALL questions in this section.

1. State **one** advantage of using binary numbers rather than decimal numbers in a computer system. 1

2. State how many bits ASCII uses to store a character. 1

3. The following is the five box diagram that represents the structure of a computer system.



- (a) Name part A. 1

- (b) Name part B. 1

4. State **one** advantage of using a laser printer compared to an ink-jet printer. 1

5. A company's computers have been networked to allow users to share files. State **two** further benefits to the company of networking their computers 2

6. Explain why standard file formats are recommended when saving files 1

7. Name the first **two** stages of the software development process. 2

8. Jules has completed a computer program using a high level language. Explain what must happen to this program before it can be run on her computer. 1

9. A set of 50 exam results needs to be stored within a program.
- (a) Name the data structure required to store this set within the program. **1**
- (b) Name the standard algorithm required to find the number of pupils who have achieved 50% or more. **1**
10. Describe **one** benefit of using pre-defined functions when programming. **1**
11. A selection of code is shown below.

$$\begin{array}{|cccccccc|} \hline 1 & 0 & 1 & 0 & 1 & 1 & 0 & 0 \\ 1 & 0 & 1 & 0 & 1 & 0 & 0 & 1 \\ 1 & 0 & 1 & 1 & 1 & 0 & 1 & 0 \\ 0 & 0 & 0 & 0 & 1 & 0 & 1 & 1 \\ \hline \end{array}$$

State the type of programming language this code has been written in. **1**

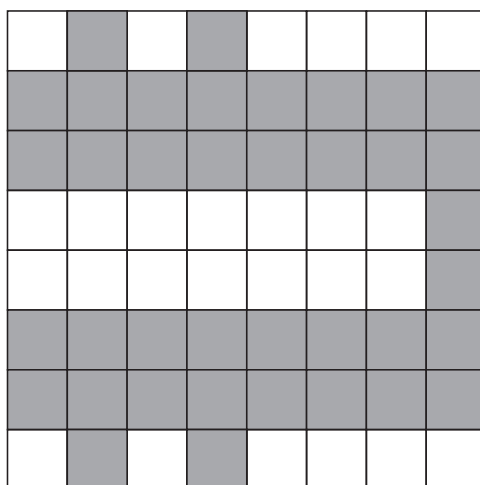
[Turn over

[END OF SECTION I]

SECTION II

Attempt ALL questions in this section.

12. An airport uses a webcam to capture a photograph of each traveller's face. At the destination airport this photograph is shown to a security guard to confirm the traveller's identity
- (a) State **one** reason why a webcam is used rather than a digital camera. 1
- (b) The software used to take the photograph has been set up with macros.
- (i) Describe **one** method of creating a macro. 1
- (ii) Describe **one** method of using a macro. 1
- (iii) State **one** benefit to the airport staff of using macros. 1
- (c) State **one** device that could be used to view the traveller's photograph at the destination airport. 1
- (d) The computers between the airports are networked.
- (i) State the type of network used. 1
- (ii) Explain why high *bandwidth* is an important factor when sending the photographs from one airport to another. 1
- (e) On occasion airport staff save the photographs onto an optical disc that cannot be overwritten. State **one** appropriate optical disc for this task. 1
- (f) The airport logo is included on the photographs. This logo is black and white and stored as a *bit map*.



Each box above represents a pixel.

- (i) Describe how this bit map graphic is stored. 1
- (ii) Calculate how many bytes are required to store this logo. 2

(11)

13. Pavel upgrades a computer system to the following specification:

12 inch LCD monitor
 2.6 Processor
 8 Gb RAM
 500 Gb Hard disk drive
 Touchpad

- (a) State the type of computer system above. 1
- (b) (i) State the appropriate units that should be used for the processor. 1
 (ii) State **two** parts of a processor. 2
- (c) *RAM* and *ROM* are used on this computer.
- (i) Describe **one** difference between ROM and RAM. 1
 (ii) Suggest **one** use for ROM. 1
- (d) Pavel designs and creates program code.
- (i) Name **two** *design notations* that Pavel could use. 2
 (ii) Explain why Pavel prefers to use *high level languages* rather than *machine code* when creating programs. 1
- (9)**

[Turn over

14. GameStar is a software company that creates computer games.

(a) Before starting a game, the user must create a password of at least 8 characters.

(i) State the *standard algorithm* used to check the length of the password. **1**

Part of this standard algorithm is shown below:

```

1.1 REPEAT
1.2     get password
1.3     calculate password length
1.4     If passwordlength < 8 THEN
1.5         display error message
1.6     END IF
1.7 UNTIL _____
    
```

(ii) Name the type of design notation used above. **1**

(iii) Complete step 1.7 of the algorithm. **1**

(iv) Steps 1.1 and 1.7 are the beginning and end of a conditional loop. Explain why a conditional loop is used here. **1**

(v) State the variable type that should be used to store the users password. **1**

(b) GameStar is currently working on a health game. To win the game, the character must collect at least 5 pieces of fruit and at least 5 vegetables.

Part of the algorithm to end the game is shown below:

```

2.1     IF fruit > 5 OR vegetables > 5 THEN
2.2         display "You have won!"
2.3     END IF
    
```

(i) Identify **two** mistakes in the pseudocode above. **2**

(ii) A new version of the game is to be released next year.

Name the stage of the software development process that is involved when creating the new version. **1**

(iii) State a feature of program code that would assist the programmers when upgrading the program. **1**

14. (continued)

- (c) State **one** reason why a technical guide would be distributed with the new game software.

1

(10)

[END OF SECTION II]

[Turn over

SECTION III

Attempt ONE part of Section III

Part A	Artificial Intelligence	Page 9	Questions 15 to 18
Part B	Computer Networking	Page 13	Questions 19 to 21
Part C	Multimedia Technology	Page 16	Questions 22 to 24

Choose **one** part and answer **all** of the questions in that part.

SECTION III

Part A—Artificial Intelligence

Attempt ALL questions in this section.

15. Sea-Alert uses artificial intelligence to monitor pollution in the Mediterranean Sea.
- (a) Satellite photographs of the Mediterranean Sea are studied daily to check for new oil spills.
- (i) State the area of artificial intelligence that is being used for this task. **1**
- (ii) Identify **one** issue that might make identification of oil spills from the satellite photographs difficult. **1**
- (b) The intelligent robot, Sea Glider, is used to detect and then disperse small oil spills.
- (i) State **one** type of sensor that could be used for this task. **1**
- (ii) Describe **one** advantage of using an intelligent robot for this task rather than a robot with no intelligence. **1**
- (c) State **one** aspect of human intelligence that artificial intelligence applications aim to copy. **1**
- (5)**

[Turn over

- 16.** Braeness International Airport uses artificial intelligence for automated ticket sales and check-in.
- (a) Speech recognition is used in the automated ticket machines. Describe **two** problems that might make communication with the ticket machine difficult. **2**
- (b) An *Artificial Neural System* is used to speed up airport check-in by identifying fingerprints.
- (i) Explain what is meant by an Artificial Neural System. **1**
- (ii) State **one** benefit of using an Artificial Neural System for identifying fingerprints. **1**
- (c) State **one** example of a hardware development, other than larger capacity backing storage, that has allowed Artificial Neural Systems to be developed. **1**
- (5)**

17. TalkWare has 150 mobile phone shops in the UK. The company has launched a website to sell its mobile phones.

The screenshot shows a web browser window with the address <http://www.talkware.co.uk>. The page features the TalkWare logo and a navigation menu. The main content area is titled "Find the Best Deals" and contains three selection boxes:

- Select payment plan:**
 - Pay Now
 - Pay Monthly
- Select cost of phone:**
 - <£50
 - £50 - £100
 - >£100
- Select number of texts:**
 - 100 per month
 - 200 per month
 - unlimited

A "Next" button is located at the bottom right of the selection boxes. To the right of the selection boxes, there is a "Contact us: 0123 456 789" section, a "Ask Mr Phone" section featuring a cartoon mobile phone character, and an "Online Assistance" section.

- (a) Customers make selections on the website and then the expert system finds the best mobile phone deal.
- State **two** advantages to the **customer** of using this expert system rather than contacting the company. 2
 - State **one** concern that employees of the company might have about the introduction of the expert system. 1
- (b) The website has a chatterbot facility to discuss suitable products for the customer. Explain why early language programs such as ELIZA would **not** be suitable for this task. 1
- (c) TalkWare sends monthly updates by e-mail to its regular customers. State the most efficient way for the company to send the latest updates to all its customers by e-mail. 1

(5)

[Turn over

18. The insurance company iSure offers vehicle insurance. The knowledge base contains facts and rules about policies on offer.

1	drives(sam,motorbike).	(<i>Sam drives a motorbike</i>)
2	drives(jane,car)	
3	drives(emily,car)	
4	drives(john,car)	
5	no_claims(john)	(<i>John has a no claims bonus</i>)
6	no_claims(emily)	
7	age(john,18)	(<i>John is 18 years old</i>)
8	age(sam,31)	
9	age(emily,25)	
10	age(jane,48)	
11	discount(X) if no_claims(X)	(<i>X should get a discount if X has a no claims bonus</i>)
12	gold_policy(X) if drives (X,car) and no_claims (X)	(<i>X should get a gold policy if X drives a car and X has no claims</i>)

- (a) (i) State the result of the following query:

? drives(emily,car). 1

- (ii) State the first result of the following query:

?discount(X). 1

- (b) Using the numbering system to help you, *trace* how the system will evaluate the query:

?gold_policy(X)
as far as the first solution. 4

- (c) The company does not insure motorbike drivers under 25 years old.

Use this information to complete this rule:

no_policy(X) 2

- (d) The knowledge base was written in a declarative language that uses *depth-first search*.

- (i) State **one** advantage of a depth-first search compared to a breadth-first search. 1

- (ii) State **one** disadvantage of a depth-first search compared to a breadth-first search. 1

(10)

[END OF SECTION III—PART A—ARTIFICIAL INTELLIGENCE]

SECTION III

Part B—Computer Networking

Attempt ALL questions in this section.

19. The Daily News company uses a computer network for file sharing, communication and *e-business*.

(a) Describe what is meant by e-business. 1

(b) The journalists use application software to create text based stories for the newspapers.

(i) Name the most appropriate application package the journalists would use. 1

(ii) The journalists use *e-mail* to send their files to the editor.
Name the feature of e-mail used. 1

(iii) The journalists use data *encryption* when sending their files.
State what the editor needs to decrypt the files. 1

(c) The company's website includes video footage of news events.
Explain why a *broadband* connection is required to view video footage on the website. 1

(d) The Daily News' website has a search facility:

	SEARCH
--	--------

A user wishes to find out which country is hosting the Commonwealth Games in 2018.

Describe the **most efficient** way of finding this information using the company's *search engine*. 2

(e) Journalists can make use of different computer systems when reporting events.

(i) Name a type of computer system that would use a *microbrowser*. 1

(ii) Describe **one** difference between a microbrowser and a *browser*. 1

(9)

[Turn over

20. FonesRUs advertises a new tablet computer on its website.



New Features

- *Touchscreen*
- *Apps*
- *Games*
- *Control home appliances*

The *user interface* of the tablet computer has been evaluated.

- (a) (i) Explain why evaluating the user interface is important. 1
- (ii) State **one** type of home appliance the tablet computer may be able to control. 1
- (b) The company sends an e-mail to all its customers to advertise the new tablet computer.
Explain why *multicast* transmission is used. 1
- (c) The company's profits have increased from online sales.
- (i) State **one** reason why online sales have increased profits. 1
- (ii) State **one** cost to the company of using the Internet for their tablet computer sales. 1
- (d) The tablet computers use *DNS* to access web pages.
- (i) What do the letters DNS stand for? 1
- (ii) State **one** future problem of DNS. 1
- (e) State **one** way in which the *Regulation of Investigatory Powers Act* could be used to monitor staff e-mail. 1
- (8)**

21. A university allows all staff and students access to the Internet, for file sharing and *e-mail*.
- (a) Describe **one** *software security* measure the university could use to ensure authorised access only. 1
- (b) The maths and science departments connect devices without using cables in four lecture rooms.
- (i) State the type of network used. 1
- (ii) *Wireless Network Interface Cards (WNICs)* are used to connect computers on this network.
Describe **one** task performed by a WNIC on this network. 1
- (iii) The departments are concerned that *hardware failure* may disrupt the network.
State **one** type of hardware failure that could affect the whole network. 1
- (c) The university's website allows online voice chat with lecturers to provide help for students.
- (i) State **one** benefit of using voice transmission to provide online help. 1
- (ii) State **one** limitation of using voice transmission in this case. 1
- (d) Some students in remote areas only have access to dial-up connections at home.
- (i) State **one** drawback of using dial-up connections. 1
- (ii) State **one** other type of Internet connection the students would like to use. 1
- (8)**

[END OF SECTION III—PART B—COMPUTER NETWORKING]

[Turn over

SECTION III
Part C—Multimedia Technology
Attempt ALL questions in this section.

22. The website MasterLingo helps holidaymakers learn the basics of a foreign language.



- (a) A WYSIWYG editor was used to create the website.
 - (i) Describe **one** benefit of using a WYSIWYG editor to create the website. 1
 - (ii) State **one** other method that could have been used to create the website. 1

- (b) Holidaymakers can download an MP3 audio file of important words and phrases.
 - (i) Name the type of compression used by MP3. 1
 - (ii) Explain why compression is used with the audio file. 1
 - (iii) State a suitable backing storage medium for storing the audio file. 1

22. (continued)

- (c) Music has been recorded for the website using a microphone. The software allowed the *sampling frequency* and *sampling depth* to be altered

Select Settings:	
Sampling Frequency	Sampling Depth
<input type="radio"/> 44 kHz	<input type="radio"/> 8 bits
<input type="radio"/> 96 kHz	<input type="radio"/> 16 bits
<input type="button" value="Cancel"/> <input type="button" value="OK"/>	

- (i) In order to have the best sound quality, state what settings should be selected for the sampling frequency **and** sampling depth. 1
- (ii) What effect will recording the sound at the best quality have on the size of the sound file? 1
- (d) Instead of recording the sound with a microphone the music could have been synthesised.
- (i) State **one** data format that would be used to store the information from the synthesised music. 1
- (ii) Describe **one** method of creating music in this way. 1
- (9)**

[Turn over

23. EGallery is a 3D virtual reality guide to a new modern art gallery.



(a) Explain why a 3D virtual reality guide rather than a slideshow of images was chosen.

1

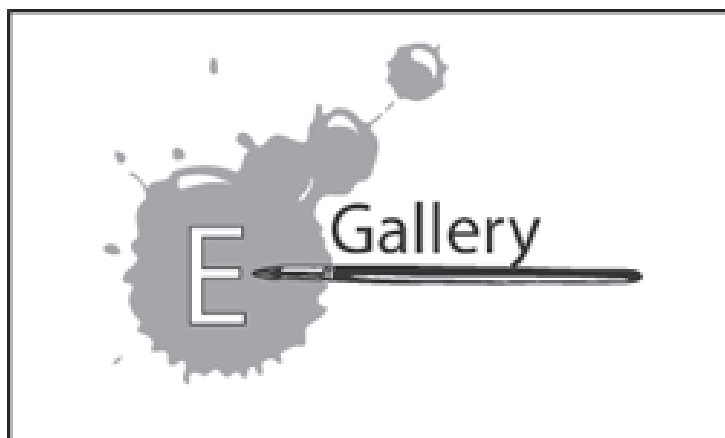
(b) The virtual reality guide contains 3D vector images. One attribute of a 3D vector image is shape.

Name **one other** attribute of a 3D vector image.

1

23. (continued)

(c) A *bit-mapped graphics package* was used to create a logo for EGallery.



- (i) State **two** ways you could check that this logo has been produced using a bit-mapped graphics package rather than a vector graphics package. 2
- (ii) Name **one** tool that has been used to create this logo. 1
- (iii) State **one** reason why a vector graphics package would not have been suitable for creating this logo. 1
- (iv) This logo is displayed on a high resolution monitor.
State the item of hardware needed to display graphics on the monitor. 1
- (v) State the law that protects the logo from being used by another gallery without permission. 1
- (8)**

[Turn over for Question (24) on *page twenty*

24. The National Police Academy is recording a video to recruit cadets, including an interview with the Police Chief.
- (a) State **one** item of hardware that is needed to capture the video. **1**
- (b) The video editing software allows the *colour depth* and *video time* to be changed.
- (i) State what is meant by the term colour depth. **1**
- (ii) State a feature of the video editing software that is used to reduce the video time. **1**
- (iii) Describe the effect of reducing the video time on the video quality. **1**
- (c) The edited video clip is 6.4 Gigabytes. It is compressed using MPEG format.
- (i) Describe how MPEG compression reduces file size. **1**
- (ii) State **one** example of an uncompressed video format. **1**
- (d) The completed video clip is part of a multimedia application.
Name **one** type of software that could be used to view this multimedia application. **1**
- (e) People interested in becoming a cadet can download an application form from the website. Application forms are saved using a *standard file format*.
State a suitable file format for saving this text file. **1**
- (8)**

[END OF SECTION III—PART C—MULTIMEDIA TECHNOLOGY]

[END OF QUESTION PAPER]

ACKNOWLEDGEMENT

Question 17 – 126412493 Shutterstock.com

Question 20 – 95028964 Shutterstock.com

Question 23 – Image of art gallery is taken from <http://www.postcardsrus.com/blog/post.cfm?id=31&how-to-market-your-art-gallery-in-print>.

SQA has made every effort to trace the owners of copyright materials reproduced in this question paper, and seek permissions. We will be happy to incorporate any missing acknowledgements. Please contact Janine.Anderson@sqa.org.uk.