

FOR OFFICIAL USE

--	--	--	--	--	--

C

	KU	HI
Total Marks		

1660/31/01

NATIONAL
QUALIFICATIONS
2013

TUESDAY, 7 MAY
1.00 PM – 2.15 PM

HOME ECONOMICS
STANDARD GRADE
Credit Level

Fill in these boxes and read what is printed below.

Full name of centre

Town

Forename(s)

Surname

Date of birth

Day Month Year

--	--	--	--	--	--

Scottish candidate number

--	--	--	--	--	--	--	--	--	--

Number of seat

- 1 Try to answer every question in this paper.
- 2 Read the questions carefully before you answer them.
- 3 Write your answers in the spaces provided.
- 4 Additional lines at the end of the booklet can be used if more space is required for answers or if you need to do any rough work.
- 5 Before leaving the examination room you must give this book to the Invigilator. If you do not, you may lose all the marks for this paper.



1. (a) An 18 year old who has just started working and has a car is applying for a credit card.

He is planning a holiday abroad and has been using the internet to buy items to take on holiday.

Study the information about credit cards below.

Information about credit cards			
	A	B	C
Interest Rate (% APR)	15.6%	10.9%	18.9%
Insurance	Travel	Motor breakdown cover	Mobile phone
Statements	Monthly paper statement	Weekly text	Online
Fraud protection	Extra cover if credit card is stolen	Cover when shopping online	Automatic alerts to unusual activity on account
Credit limit	£8,000	£2,500	£3,000
Advice	Bank hours only	24 hour help line	8 am – 8 pm Mon to Sat
Introductory offers	<ul style="list-style-type: none"> • 3 months interest free credit • 3 different colours of card available 	<ul style="list-style-type: none"> • 6 months interest free credit • Commission free purchases abroad 	<ul style="list-style-type: none"> • 4 months interest free credit • £10 cash back
Reward scheme	<ul style="list-style-type: none"> • Dining out vouchers 	<ul style="list-style-type: none"> • Petrol vouchers 	<ul style="list-style-type: none"> • Air Miles

- (i) Choose the **most suitable** credit card for the 18 year old.

Credit card _____

DO NOT
WRITE
IN THIS
MARGIN

Marks

KU	HI
1	

Marks

KU	HI

1. (a) (continued)

(iii) Which would be the **most suitable** credit card for someone who likes to eat at expensive restaurants regularly?

Credit card _____

1

(b) Other than going on holiday and buying a car, give **two** reasons why it is important for a teenager to save money.

Reason 1 _____

1

Reason 2 _____

1

(c) Other than **cost**, identify **two** factors to consider when choosing clothing for a teenager.

Explain why **each** factor is important for the teenager.

Factor 1 _____

1

Explanation _____

1

Factor 2 _____

1

Explanation _____

1

2. (a) (continued)

DO NOT
WRITE
IN THIS
MARGIN

Evaluation 3 _____

Marks

	KU	HI
3		
3		
1		
1		
1		
1		

Evaluation 4 _____

(b) Using the following headings, list **two** steps to take to reduce Vitamin C loss when;

• **Storing food**

Step 1 _____

Step 2 _____

• **Preparing food**

Step 1 _____

Step 2 _____

Marks

2. (continued)

(c) Thinking about **nutrition**, complete the following table.

Nutrient	One main food source	Function of nutrient in the body
Vitamin B2	<hr/>	<hr/> <hr/> <hr/>
Sodium	<hr/>	<hr/> <hr/> <hr/>
Folic Acid	<hr/>	<hr/> <hr/> <hr/>

2

2

2

KU	HI

[Turn over for Question 3 on *Page ten*

Marks

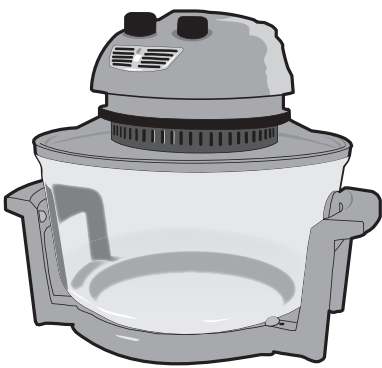
KU	HI

3. (a) A family of four want to buy a halogen oven to use while their kitchen is being renovated.

The parents work full time and the two children attend after school activities five days a week.

The family likes to eat together and enjoy healthy foods.

Study the information about the halogen oven below.

Information about the halogen oven	
<ul style="list-style-type: none"> • 40% faster than traditional ovens • Self clean lining • Automatic timer • Recipe book included • Variety of cookery processes¹ • No preheating required • Height extension ring² • Portable 	

Key
<ul style="list-style-type: none"> • Variety of cookery processes¹ – roasts, bakes, steams, grills, toasts • Height extension ring² – increases oven capacity

Evaluate the suitability of the halogen oven for the family by:

- explaining **why** it is suitable for the family;
- indicating **how** it is useful to the family.

Evaluation 1 _____

2

3. (continued)

(b) Give **four** steps a household could take to reduce energy bills.

Step 1 _____

Step 2 _____

Step 3 _____




Step 4 _____

Marks

KU	HI
1	
1	
1	
1	

4. (a) A pregnant mum is going to buy a high chair. She wants one that she can use with her 3 year old and use later for the baby. She needs it to be easy to move around the house. Safety and hygiene are important to the pregnant mum.

Study the information about high chairs below.

Information about high chairs			
	A	B	C
			
Seat	Padded insert with washable cover	Fixed wipe-clean seat	Multiple position 360° swivel seat
Harness	Purchase separately	Padded harness included	5 point safety harness included
Age	6 months – 4 years	4 months – 2 years	0–5 years
Warranty	3 years	2 years	7 years
Feeding tray	Deep lined ¹	Wipe clean plastic	Dishwasher safe
Assembly	Partial self assembly	Comes ready assembled	Tool free assembly
Special features	<ul style="list-style-type: none"> • Converts to play seat • Solid wood frame 	<ul style="list-style-type: none"> • Folds flat • Lightweight 	<ul style="list-style-type: none"> • Enclosed wheels² • 3-in-1 grow chair³

Key

- Deep lined¹ – catches any food or drink spilled
- Enclosed wheels² – lift and glide castors
- 3-in-1 grow chair³ – resting insert for newborn to 6 months; feeding chair for 6 months and above; play chair for 3–5 years

4. (a) (continued)

- (i) Choose the **most suitable** high chair for the pregnant mum.

High chair _____

- (ii) Give **four** reasons for your choice and explain why **each** reason is important for the pregnant mum.

Reason 1 _____

Reason 2 _____

Reason 3 _____

Reason 4 _____

Marks

	KU	HI
1		
2		
2		
2		
2		

4. (a) (continued)

(iii) Which high chair would be the **most suitable** for a parent who has poor DIY skills and limited space in their kitchen?

High chair _____

(b) Identify **three** accidents which could occur in the bedroom of a toddler.

When planning a bedroom explain how a parent could prevent each accident.

Accident 1 _____

Explanation _____

Accident 2 _____

Explanation _____

Accident 3 _____

Explanation _____

Marks

KU	HI
1	
1	
1	
1	
1	
1	

Marks

4. (continued)

(c) Identify and explain **three** points of advice, other than nutrition, to be considered when weaning a baby.

Point of advice 1 _____

Explanation _____

Point of advice 2 _____

Explanation _____

Point of advice 3 _____

Explanation _____

1

1

1

1

1

1

KU	HI

[END OF QUESTION PAPER]

FOR OFFICIAL USE ONLY

	KU		HI	
1		10		10
2		10		12
3		8		8
4		12		10
Total Marks		40		40