

FOR OFFICIAL USE

--	--	--	--	--	--

F

KU ES

--	--

Total Marks

1260/27/01

NATIONAL TUESDAY, 8 MAY
 QUALIFICATIONS 9.00 AM – 10.05 AM
 2012

GEOGRAPHY
STANDARD GRADE
 Foundation Level

Fill in these boxes and read what is printed below.

Full name of centre

Town

Forename(s)

Surname

Date of birth

Day Month Year

--	--	--	--	--	--

Scottish candidate number

--	--	--	--	--	--	--	--	--	--

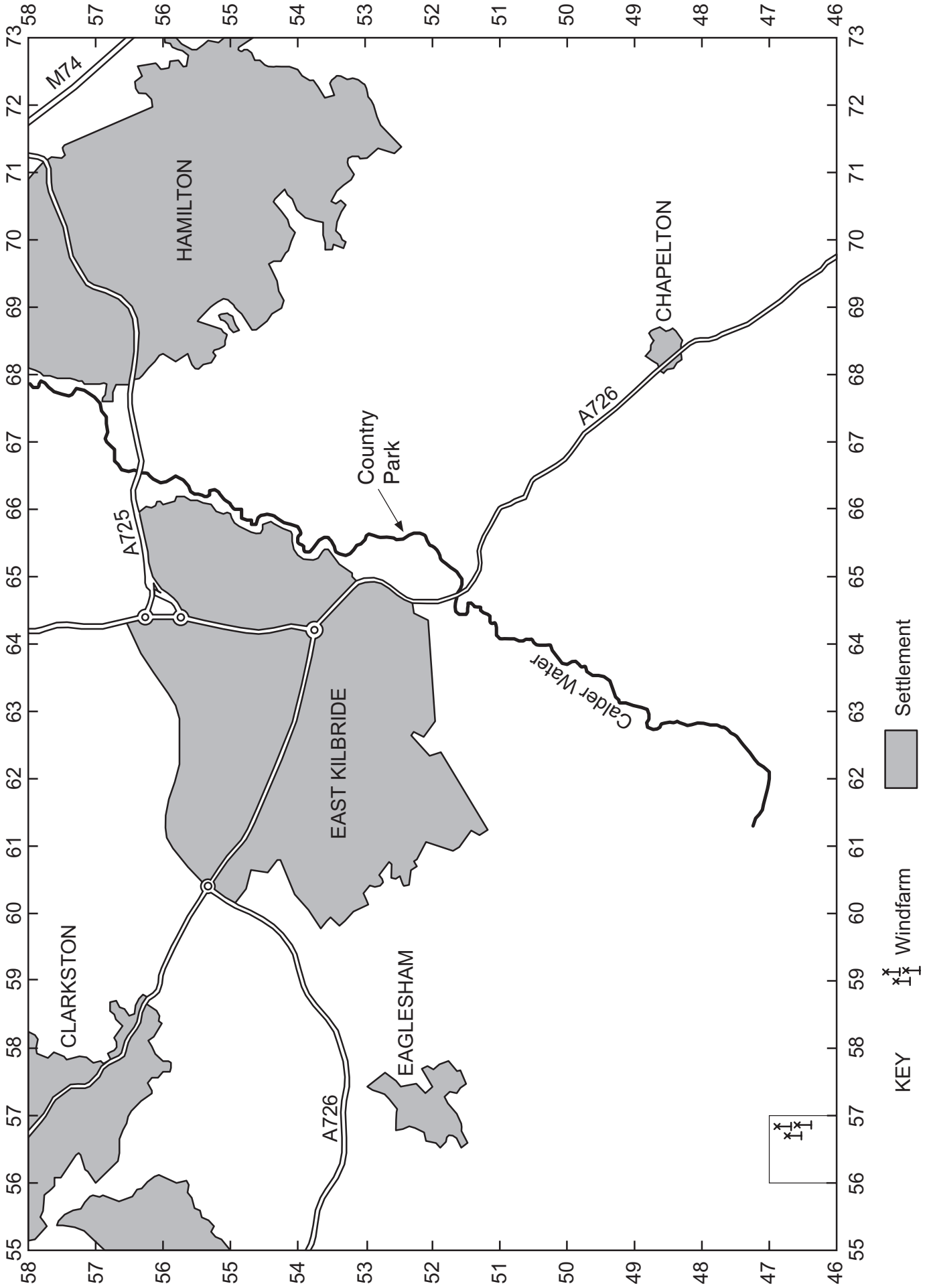
Number of seat

- 1 Read the whole of each question carefully before you answer it.
- 2 Write in the spaces provided.
- 3 Where boxes like this are provided, put a tick ✓ in the box beside the answer you think is correct.
- 4 Try all the questions.
- 5 Do not give up the first time you get stuck: you may be able to answer later questions.
- 6 Extra paper may be obtained from the Invigilator, if required.
- 7 Before leaving the examination room you must give this book to the Invigilator. If you do not, you may lose all the marks for this paper.



Question 1

Diagram Q1A



Marks		KU	ES
2			
3			
2			

Question 1 (continued)

This question refers to Ordnance Survey Map Extract (No 1936/64) of the East Kilbride area and Diagram Q1A on *Page two*.

(a) Find grid squares 5753 and 5651 on the map extract.

Which river valley feature is found in each square?

Choose from: **Reservoir with streams** **Ox-bow Lake** **Waterfalls**

Grid square 5753 _____

Grid square 5651 _____

(b) Look at the Ordnance Survey map and Diagram Q1A.

Calderglen Country Park* is found around grid square 6553 and 6552.

*A country park is an area for people to visit and enjoy recreation in the countryside.

Do you think this is a good location for a country park?

Tick (✓) your choice.

Yes No

Give **three** reasons for your choice.

Reason 1 _____

Reason 2 _____

Reason 3 _____

(c) What **two** gathering techniques could pupils use to find out about the attractions of Calderglen Country Park?

Tick (✓) your choices.

Questionnaire to visitors

Measure soil temperatures

Contact a local bus company

Interview ranger

Question 1 (continued)

Diagram Q1C: Proposed Superstore



(h) A new superstore is planned near Newlands Farm in square 6052.

Do you think this development should go ahead?

Tick (✓) your choice.

Yes No

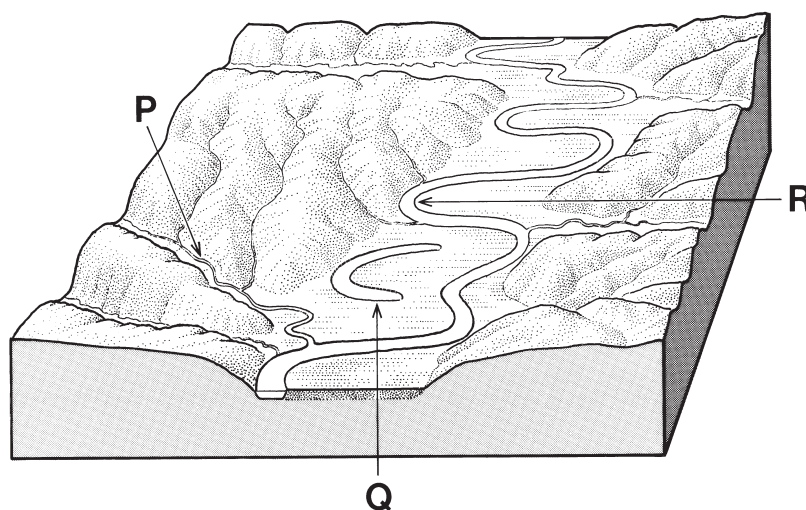
Give reasons for your choice.

3

[Turn over

Question 2

Diagram Q2A: Features of a River



(a) Look at Diagram Q2A.

Name features P, Q and R.

Choose from: **Ox-bow Lake** **Meander** **Tributary**

P _____

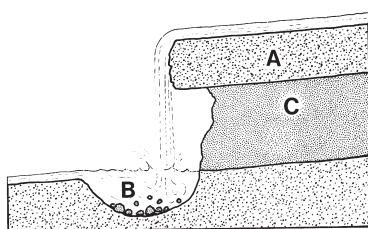
Q _____

R _____

2

(b)

Diagram Q2B: Features of a Waterfall



Look at Diagram Q2B.

Match the letters A, B and C to the correct feature in the table below.

<i>Name of Feature</i>	<i>Letter</i>
Plunge pool	
Layer of soft rock	
Layer of hard rock	

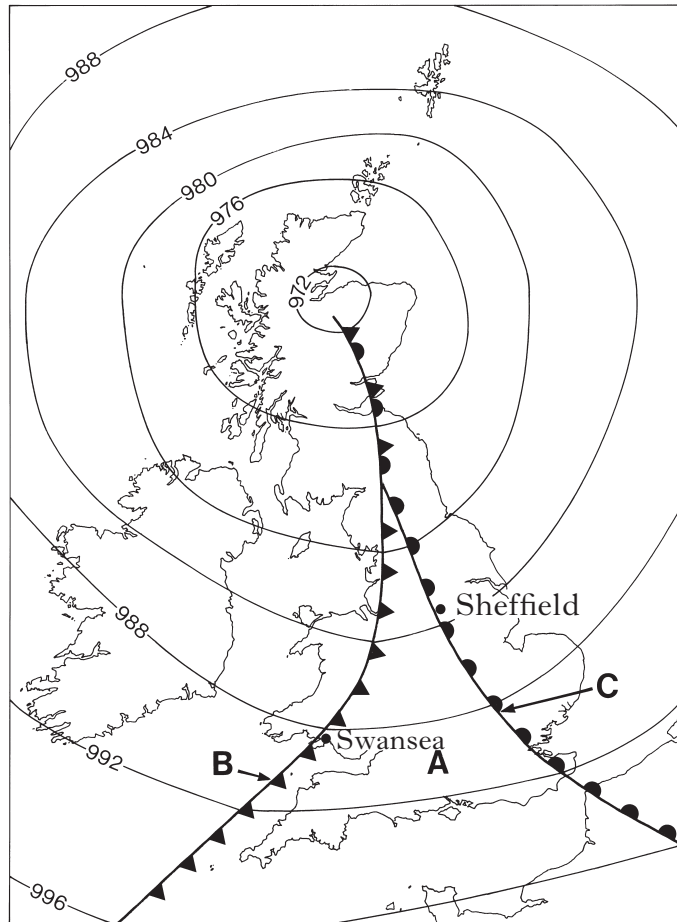
2

Question 3

Marks

KU	ES
----	----

Diagram Q3A: A Weather Map



(a) Study Diagram Q3A.

Match the letters A, B and C with the correct weather feature in the table below.

<i>Weather Feature</i>	<i>Letter</i>
Warm front	
Warm sector	
Cold front	

2

(b) Which **two** of the following statements about the weather shown on Diagram Q3A are correct?

Tick (✓) your choices.

There is a high pressure system over Britain.

It is dry in Swansea.

There is a low pressure system over Britain.

It is raining in Sheffield.

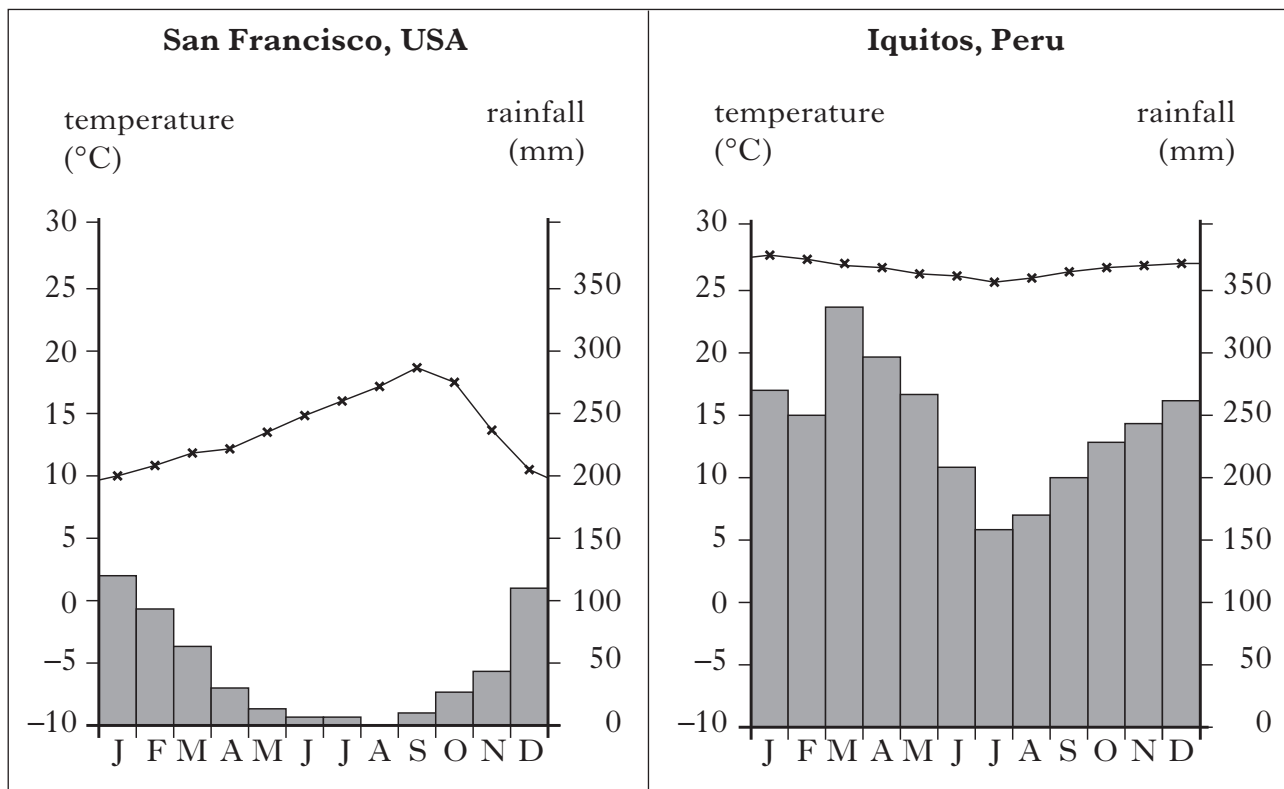
2

Question 4

Marks

KU	ES
----	----

Diagram Q4: Climate Graphs for San Francisco and Iquitos



Study Diagram Q4.

(a) Which **two** of the statements below are correct?

Tick (✓) your choices.

Iquitos has lower temperatures than San Francisco.

The range of temperature in San Francisco is greater than Iquitos.

Iquitos has a tropical rainforest climate.

San Francisco has a hot desert climate.

2

(b) Which place has the more pleasant climate?

Give reasons for your choice.

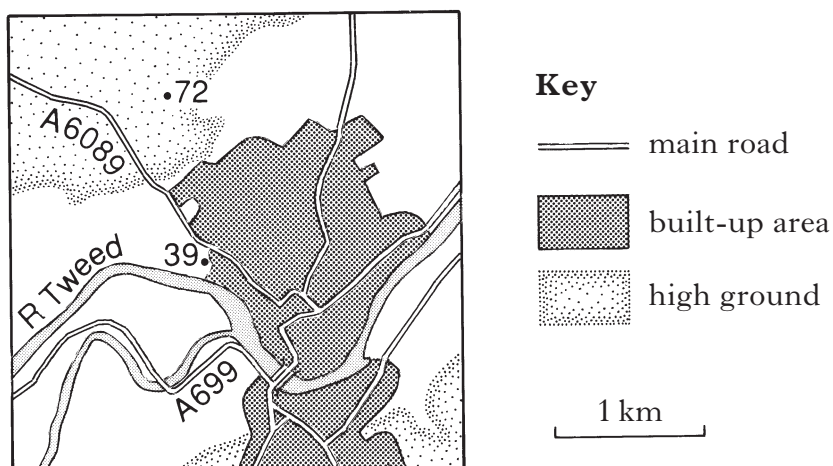
Choice _____

Reasons _____

2

Question 5

Diagram Q5: Site of Kelso



(a) Study Diagram Q5 above.

Give **one** advantage and **one** disadvantage of the site of Kelso.

Advantage _____

Disadvantage _____

2

(b) Match these settlement types to the correct description in the table.

Market town

Tourist resort

Commuter town

<i>Settlement Type</i>	<i>Description</i>
	Where people go on holiday
	Where people live but work elsewhere
	Where farmers come to buy and sell

2

[Turn over

Question 6

DO NOT
WRITE
IN THIS
MARGIN

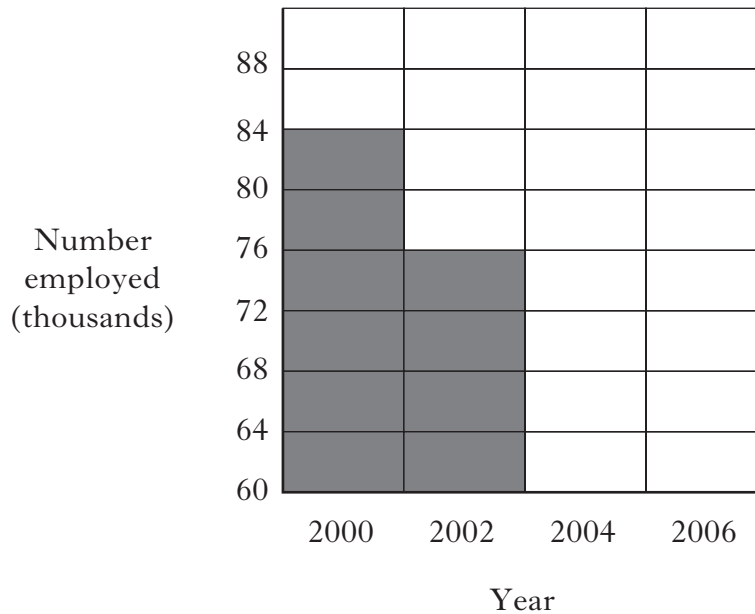
Diagram Q6A: Number of People employed in Farming

Marks

KU	ES
----	----

Year	2000	2002	2004	2006
Number employed (thousands)	84	76	68	64

Diagram Q6B: Number of People employed in Farming



(a) **Complete** the graph above using the figures in Diagram Q6A.

2

(b) Give **two** reasons why the number of people employed in farming has gone down.

Reason 1 _____

Reason 2 _____

2

Question 7

(a) Put the following industries in the correct column of the table below.

Car manufacturing Coal mining Tourism

<i>Primary Industry</i>	<i>Secondary Industry</i>	<i>Tertiary Industry</i>

2

Marks	KU	ES
3		
2		
2		

Question 9

Complete the statements about the European Union.

Choose from: **quota; free trade; an alliance; tariff.**

1. A group of countries that work together is _____
2. A tax put on goods from outside the EU is a _____
3. A limit put on goods entering the EU is a _____

Question 10

(a) Match the following words to the descriptions in the table below.

Imports Balance of Trade Exports

<i>Description</i>	<i>Words</i>
Goods that are sold to other countries	
The value of exports minus the value of imports	
Goods that are bought from other countries	

Diagram Q10: Fair Trade

- Products are bought directly from the small producers
- Difficult to compete with well known brands
- At least 20% profit goes to the growers
- Fair trade goods cost more to buy

(b) Look at Diagram Q10.

“Fair Trade benefits farmers in developing countries.”

Do you agree with the statement above?

Tick (✓) your choice.

Yes No

Give **two** reasons for your choice.

[BLANK PAGE]

[BLANK PAGE]